

**Prealgebra:
More with Numbers**

Name: _____

In each problem, write the decimal version of each number, and place it on the given number line.

1.)

A: $\frac{\pi}{0.90}$

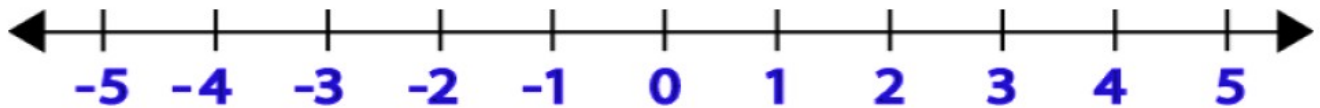
D: $-2\frac{3}{8}$

B: $\sqrt{20}$

E: -2.8

C: $-\sqrt{16}$

F: $\frac{5}{3}$



2.)

A: $\frac{\sqrt{2}}{2}$

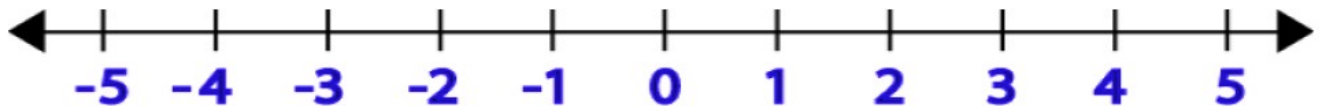
D: $1\frac{5}{6}$

B: $-\frac{55}{12}$

E: $|-2|$

C: -1.1

F: $\frac{1}{5}$



3.)

A: $-\sqrt{8}$

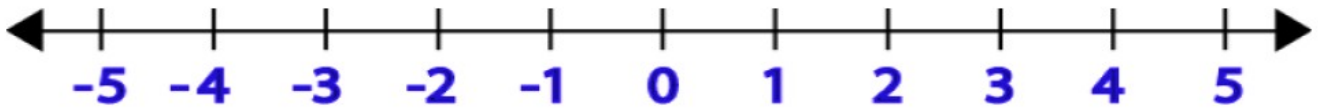
D: $1\frac{5}{6}$

B: $-\frac{2\pi}{5}$

E: 1.4^2

C: -4.9

F: $-\frac{4}{4}$



4.)

A: $\frac{3}{2}$

D: $-3\frac{4}{7}$

B: $-\frac{\sqrt{5}}{5}$

E: 2.1^2

C: $-\frac{1}{4}$

F: $|3|$

