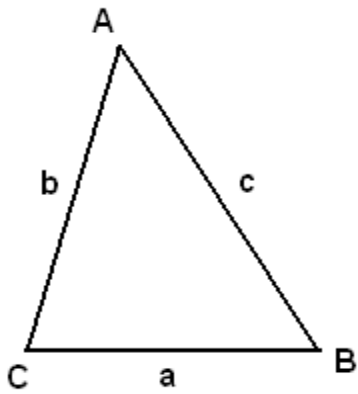
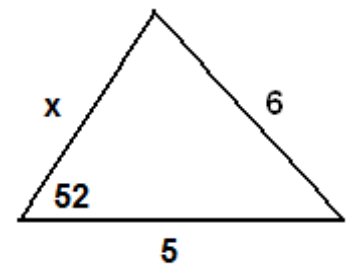
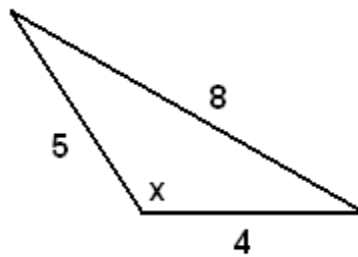
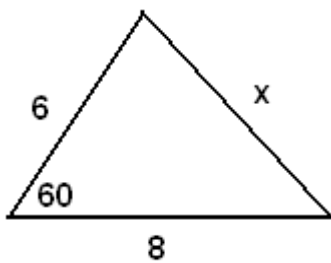


CP Geometry  
Law of Cosines

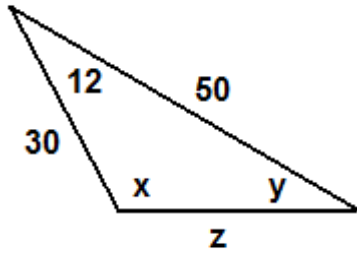
Name: \_\_\_\_\_



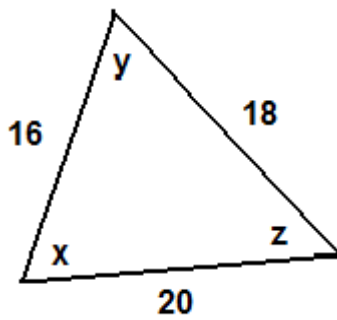
[ EX 1 ] Find the value of x in each figure below.



[ EX 2 ] Find the values of the variables.



[ EX 3 ]



[ EX 4 ] Three mutually tangent circles have radius lengths 4, 5, and 6. Determine the area of the region trapped between the three circles.

