

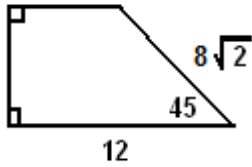
**SHOW YOUR WORK ON SEPARATE PAGE(S)**

**Find the area of each item.**

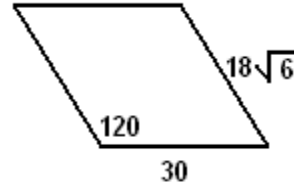
1.) An equilateral triangle with side length 20. (Think 30-60-90) EXACT

2.) An equilateral triangle with height 6. (Think 30-60-90) EXACT

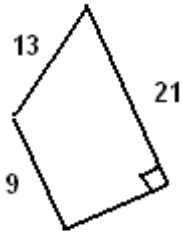
3.) Trapezoid EXACT



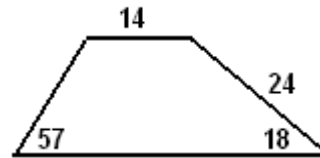
4.) Parallelogram EXACT



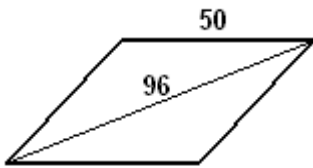
5.) Trapezoid EXACT



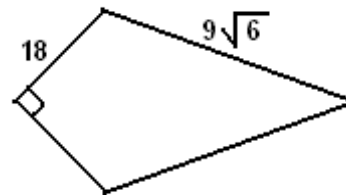
6.) Trapezoid Decimals



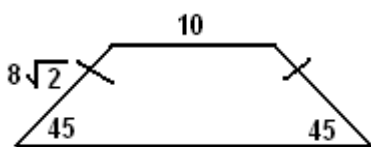
7.) The rhombus below. EXACT  
[ Hint: Draw other diagonal ]



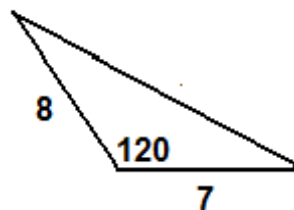
8.) The kite below. EXACT



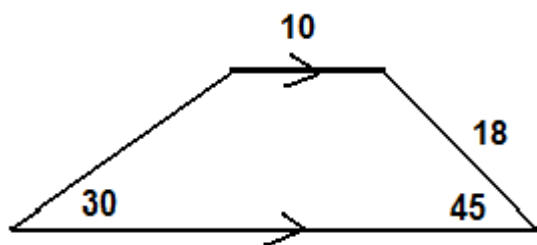
9.) The trapezoid below EXACT



10.) The obtuse triangle below. EXACT



11.) Trapezoid EXACT



12.) Kite EXACT

