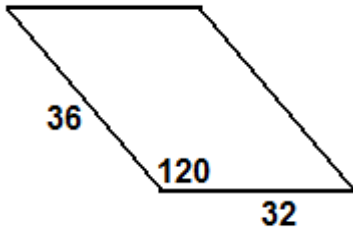
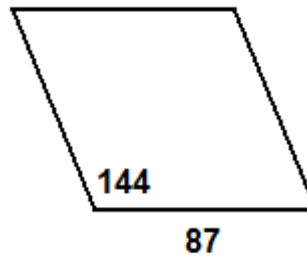


Find the area and perimeter of each figure, unless stated otherwise. SHOW YOUR WORK FOR CREDIT!

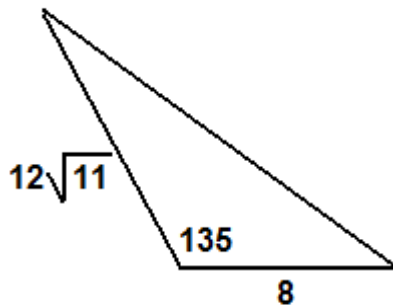
1.) Parallelogram - EXACT



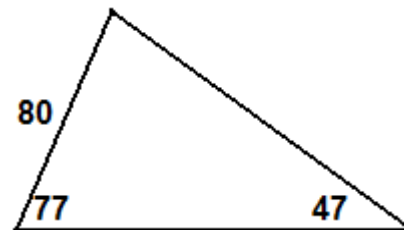
2.) Rhombus – Rounded with Decimals



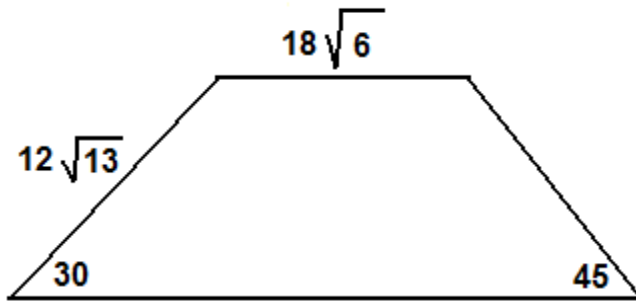
3.) Triangle - EXACT
(AREA ONLY)



4.) Triangle – Rounded with Decimals



5.) Trapezoid – EXACT



6.) Kite - EXACT

