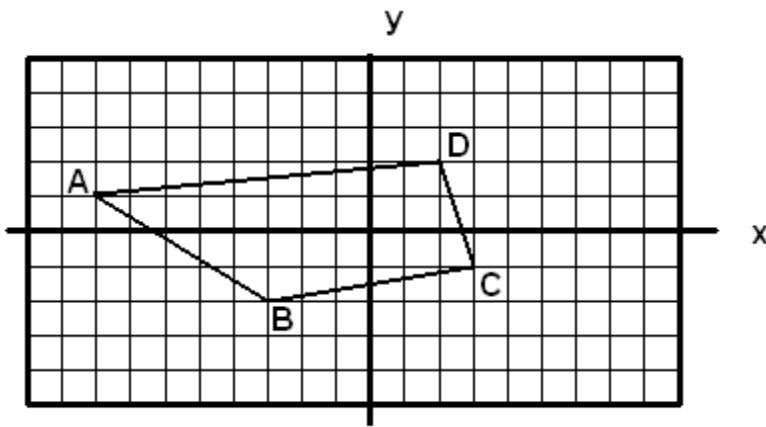


CP Geometry
 Quadrilaterals in the Plane

Name: _____

1.)



Slopes

$$m \overline{AB} =$$

$$m \overline{BC} =$$

$$m \overline{CD} =$$

$$m \overline{AD} =$$

Lengths

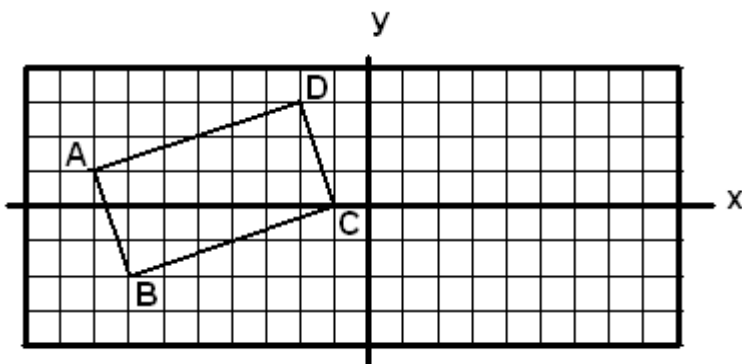
$$AB =$$

$$CD =$$

$$BC =$$

$$AD =$$

2.)



Slopes

$$m \overline{AB} =$$

$$m \overline{BC} =$$

$$m \overline{CD} =$$

$$m \overline{AD} =$$

Lengths

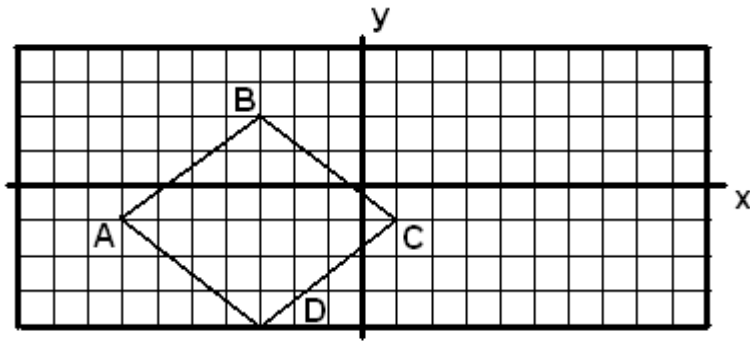
$$AB =$$

$$CD =$$

$$BC =$$

$$AD =$$

3.)



Slopes

$$m \overline{AB} =$$

$$m \overline{BC} =$$

$$m \overline{CD} =$$

$$m \overline{AD} =$$

Lengths

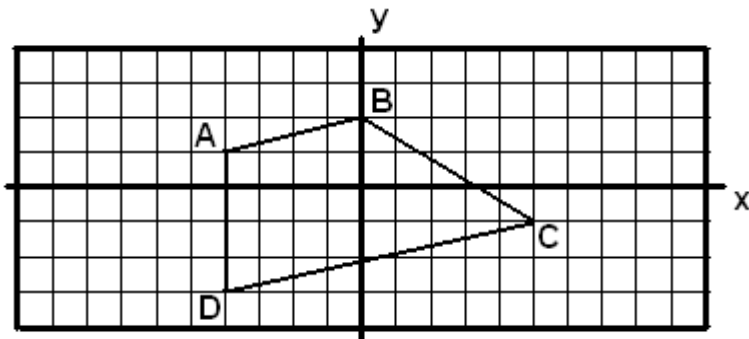
$$AB =$$

$$CD =$$

$$BC =$$

$$AD =$$

4.)



Slopes

$$m \overline{AB} =$$

$$m \overline{BC} =$$

$$m \overline{CD} =$$

$$m \overline{AD} =$$

Lengths

$$AB =$$

$$CD =$$

$$BC =$$

$$AD =$$