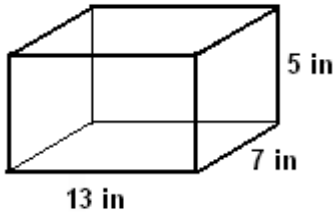


CP Geometry
More with Volume

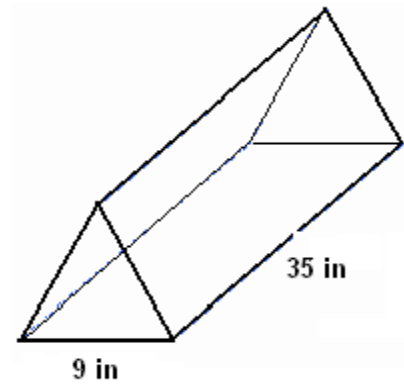
Name: _____

Find the volume of each of the following...

1.) (Rectangles)



2.) (Equilateral Triangles forming a prism)

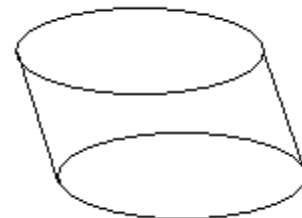


3.) (Regular Polygons)

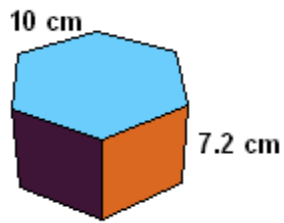


4.) (Oblique Cylinder)

Diameter: 18 cm
Vertical Height: 4 cm



5.) (Regular Polygons)



6.) "Parallelepiped"
(All Parallelograms... rectangles on top and bottom .. use Trig for height)

