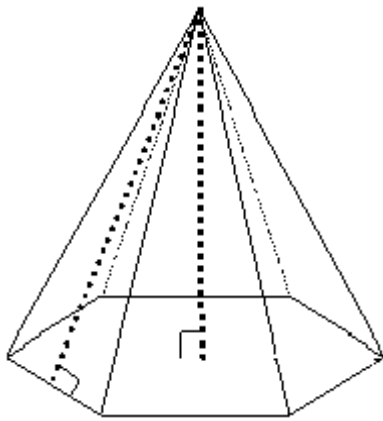


Advanced Geometry  
Surface Area HW

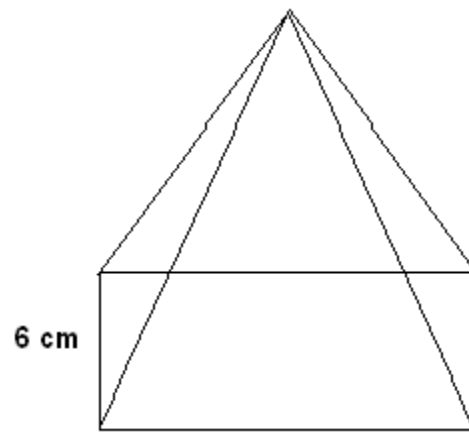
Name: \_\_\_\_\_

1.) Right Hexagonal Pyramid



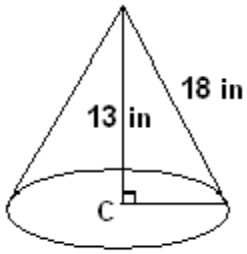
41 cm  
height = 57 cm

2.) Right Rectangular Pyramid

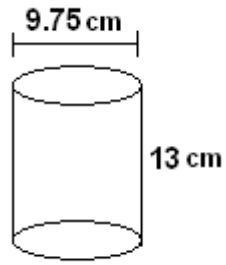


6 cm  
14 cm  
height = 17 cm

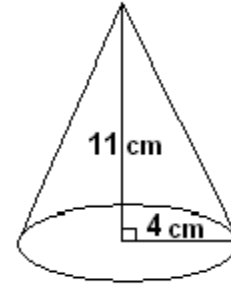
3.) Right Cone



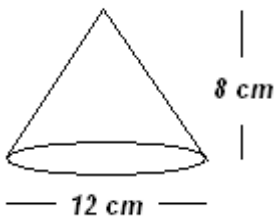
4.) Right Cylinder



5.) Right Cone



6.) Find the surface area of the right cones below.



Height = 6 cm

